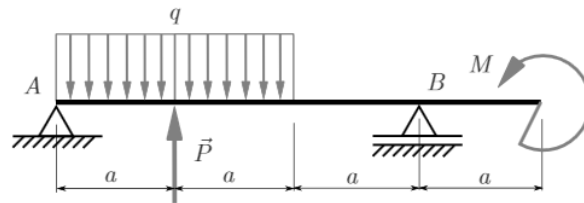
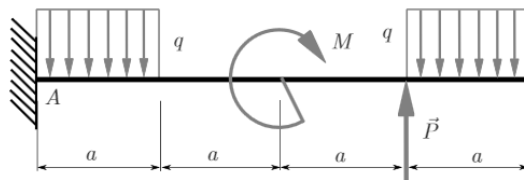


Polecenie do zadań 1, 2, 3, 4, 5. Dla układów jak na rysunku obliczyć reakcje. Do obliczeń przyjąć  $P=qa$ ,  $M=qa^2$ ,  $\alpha=30^\circ$

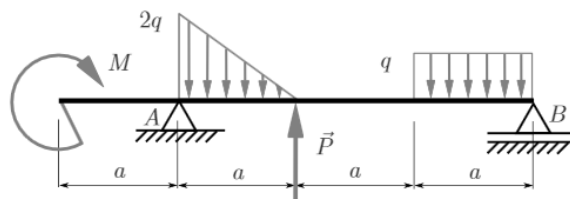
Zadanie 1



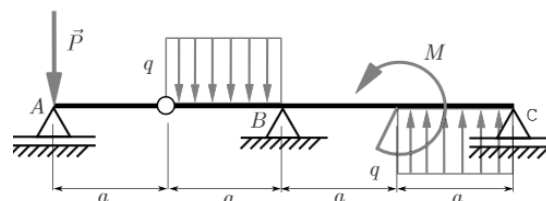
Zadanie 2



Zadanie 3



Zadanie 4



Zadanie 5

